

Objective 4: Intro to Reactivity 1: identify acids and bases using Lewis definition. Use curved arrows to show how base reacts with acid. Relate strength to pK_a . Determine direction of equilibrium. Use pK_a table to estimate pK_a of acid based on structure.

Quiz Practice problems

Key ideas:

In General Chemistry, we looked at acids as proton (H^+) donors and bases as proton (H^+) acceptors. This is the Bronsted-Lowry definition.

In organic chemistry, we will look at acids as electron pair acceptors and bases as electron pair donors. This is the Lewis definition.

Organic acids are weak acids. The acid dissociation constant, K_a , is less than 1.

Every acid has a partner or conjugate base.

A pK_a table ranks acids from strong to weak and usually shows the conjugate base of each acid.

An acid reacts with a base. Curved arrows are used to show which bonds break and form. You can use curved arrows to predict the products of an acid-base reaction.

An acid has to be strong enough to react with a base. Or a base has to be strong enough to react with an acid. A pK_a table tells you the direction of equilibrium (more products or more reactants at equilibrium).

Skills:

Relate pK_a to acid strength.

Use pK_a table to identify acidic H and basic atom.

Use pK_a table to identify the conjugate base of an acid.

Use curved arrows to show bonds breaking and forming in an acid-base reaction.

Predict and draw the structures of the products of an acid-base reaction.

Use pK_a table to predict whether an acid-base reaction occurs. In other words, determine the direction of equilibrium (more products or more reactants at equilibrium).

0. a. Every acid has a conjugate base. A strong acid easily donates its proton. Does the conjugate base of a strong acid easily accept a proton?

b. Is the conjugate base of a strong acid strong or weak?

c. What does pK_a of an acid represent?

d. Is an acid with a large pK_a a strong acid or weak acid?

1. Water can behave like an acid.

a. When water is an acid, the pK_a is 15.7. Is water a strong acid or weak acid? Does water easily donate its proton to form OH^- or not?

b. What is the conjugate base of water? Is conjugate base of water strong or weak? Does the conjugate base of water easily accept a proton to form water or not?

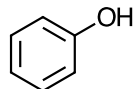
2. Water can behave like a base.

a. What is the conjugate acid of water?

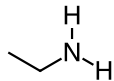
b. What is the pK_a of the conjugate acid of water? Is the conjugate acid of water a strong acid or weak acid?

c. Based on the pK_a of the conjugate acid of water, is water a strong base or weak base?

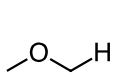
3. Many organic compounds behave like an acid or a base (depending on the conditions).



phenol



ethyl amine

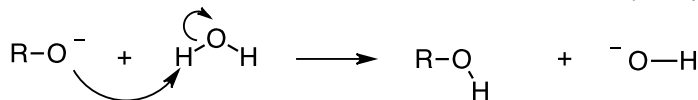


dimethyl ether

a. The acidic H is shown in each compound. Estimate the pK_a of each acid. Draw the conjugate base of each acid.

b. The O or N in each compound is basic. Draw the conjugate acid of each compound. Estimate the pK_a of each acid. Rank the bases from strongest to weakest.

4. a. RO^- is the weakest base that reacts with water. (See pK_a table.)



Draw in the H's and lone pairs in each reactant and product.

b. Curved arrows show bonds breaking and forming. A curved arrow starts at the base and ends at the H in an acid.

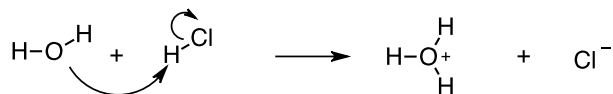
A lone pair on the O in RO^- behaves like a Lewis base (electron pair donor). The H in H-O-H behaves like a Lewis acid (electron pair acceptor). The lone pair on the O in RO^- forms a bond to the H on H-O-H. Why does the H-O bond in H-O-H have to break?

c. When the H-O bond in H-O-H breaks, what happens to the electron pair?

d. (i) Circle the bond that breaks in the reactants.

(ii) Box the bond that forms in the products.

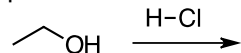
5. HCl reacts with H-O-H. Curved arrows show how bonds break and form in this reaction.



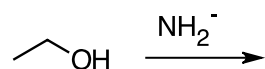
a. Circle the bond that breaks in the reactants.

b. Box the bond that forms in the products.

6. a. Ethanol reacts with HCl. Use curved arrows to show how ethanol reacts with HCl. Draw the structures of the products. Is ethanol behaving like an acid or base?



b. Ethanol reacts with NH_2^- . Draw the structure of NH_2^- . Use curved arrows to show how ethanol reacts with NH_2^- . Draw the structures of the products. Is ethanol behaving like an acid or base?



7. When you do an acid-base reaction, make sure you choose a base that is strong enough to react with the acid (or vice versa).

(i) See a pK_a table. Remember that an acid reacts with a base below it on the table.

(ii) Another way: Remember in an acid-base reaction:



Compare the pK_a of the acids in the reaction.

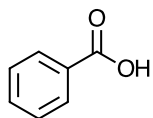
If the reactant acid is stronger than the product acid, the reaction occurs (equilibrium favors products).

If the reactant acid is weaker than the product acid, the reaction does not occur (equilibrium favors reactants).

a. Phenol (from Question 3) reacts with NaHCO_3 . Draw the structure of HCO_3^- . Use curved arrows to show how this reaction occurs. Draw the structures of the products. Does the equilibrium favor the products or reactants?

b. Phenol (from Question 3) reacts with NaOH . Draw the structure of OH^- . Use curved arrows to show how this reaction occurs. Draw the structures of the products. Does the equilibrium favor the products or reactants?

c. Does benzoic acid react with NaHCO_3 or NaOH ? Give reasons.



benzoic acid

d. In Lab 2, you will try to separate a mixture of three compounds by an acid-base extraction. You have a mixture of benzoic acid and phenol. Which base would you use that reacts with one compound in the mixture but not the other?

8. Acetylene, C_2H_2 , is an acid. It is used as a fuel but is also used to make many organic compounds.

a. What is the pK_a of the acidic proton in acetylene?

b. What is the weakest base that reacts with acetylene? Use curved arrows to show how acetylene reacts with this base. Draw the structures of the products.

9. Acetone, $(\text{CH}_3)_2\text{CO}$, can behave like an acid or a base.

a. What is the pK_a of the acidic proton in acetone?

b. What is the weakest base that reacts with acetone? Use curved arrows to show how acetone reacts with this base. Draw the structures of the products.

c. The oxygen in acetone behaves like a base. What is the pK_a of the conjugate acid of acetone?

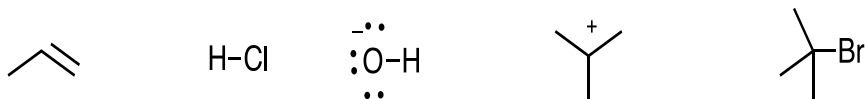
d. What is the weakest acid that reacts with acetone? Use curved arrows to show how acetone reacts with this acid. Draw the structures of the products.

10. So far, we have looked at acids as electron pair donors and bases as electron pair acceptors, specifically H^+ . Most organic reactions are "polar" reactions. This means an electron pair donor (Lewis base) reacts with an electron pair acceptor (Lewis acid). Other Lewis acids and bases are shown in the Table.

Table. Examples of Lewis acids and bases.

Lewis base	Lewis acid
Electron pair donor	Electron pair acceptor, e.g., H^+
(-) charge	(+) charge
(-) pole (δ^-)	(+) pole (δ^+)
Nucleophile ($Nu:^-$)	Electrophile (E^+)
Electron Source	Electron Sink
lone pair, e.g., OH^-	electron deficient species
π bond	less EN atom in polar bond

a. Identify each compound as a Lewis acid or Lewis base.



b. Curved arrows are used to show how reactants form products. Curved arrow starts at a Lewis base (nucleophile) and ends at a Lewis acid (electrophile). For the reactions below, draw the structure of the product of each reaction (4 reactions).

